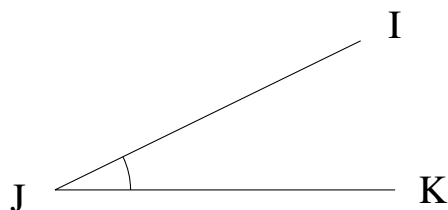


# Measuring Angles (A)

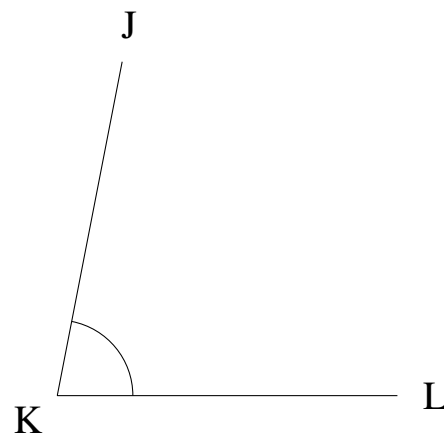
Estimate and measure each angle.

1.



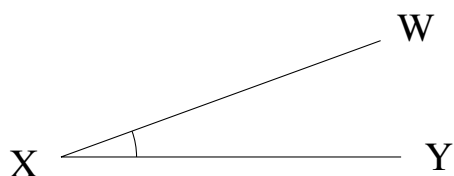
$$m\angle IJK =$$

2.



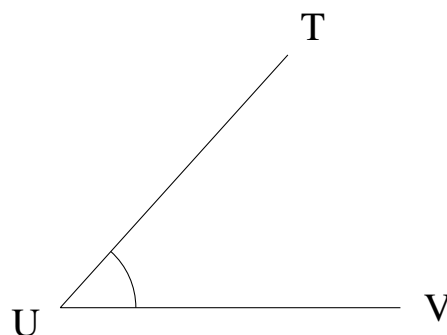
$$m\angle JKL =$$

3.



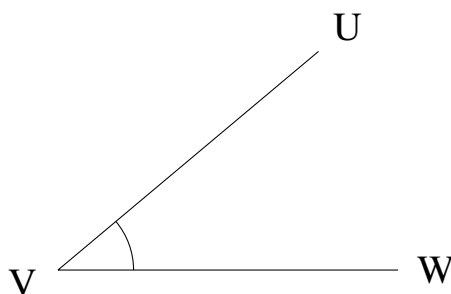
$$m\angle WXY =$$

4.



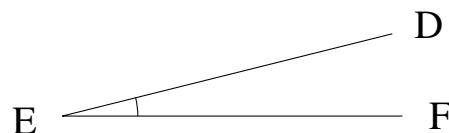
$$m\angle TUV =$$

5.



$$m\angle UVW =$$

6.

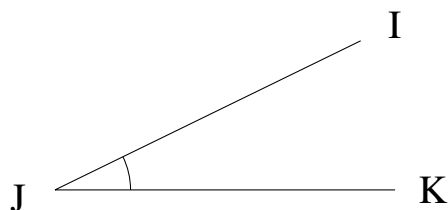


$$m\angle DEF =$$

## Measuring Angles (A) Answers

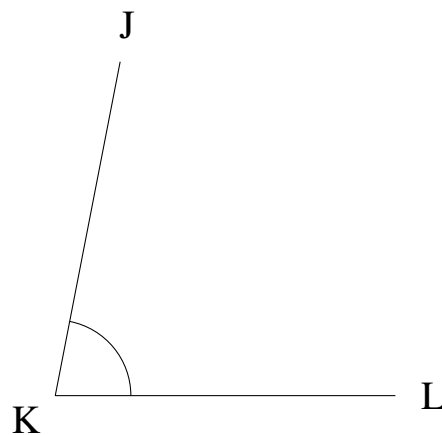
Estimate and measure each angle.

1.



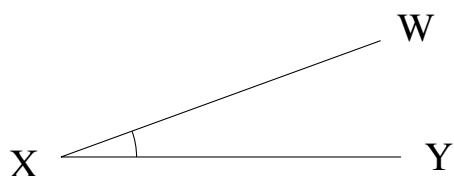
$$m\angle IJK = 26^\circ$$

2.



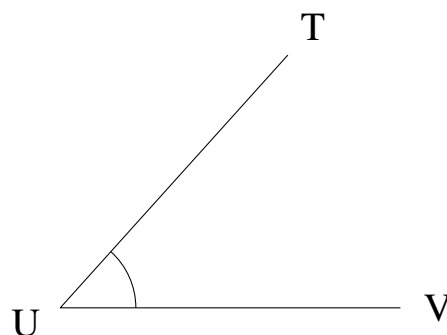
$$m\angle JKL = 79^\circ$$

3.



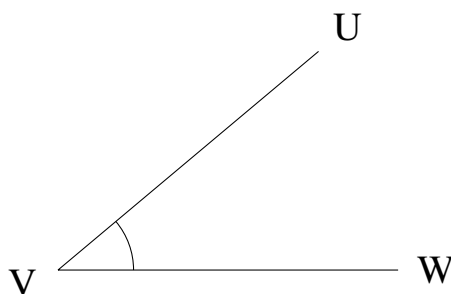
$$m\angle WXY = 20^\circ$$

4.



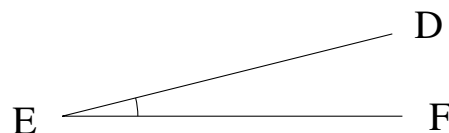
$$m\angle TUV = 48^\circ$$

5.



$$m\angle UVW = 40^\circ$$

6.



$$m\angle DEF = 14^\circ$$